







# Write the Fraction

A. What fraction of each food has been eaten?

1. 	$\frac{2}{4}$
2. 	
3. 	
4. 	
5. 	
6. 	

B. Draw these scenarios in the same style as the questions above.

7. Najim has eaten $\frac{1}{5}$ of the chocolate bars.	
8. Steve has eaten $\frac{2}{3}$ of the crisps.	
9. Lynda has eaten $\frac{1}{2}$ of the chips.	
10. Desmond has eaten $\frac{3}{4}$ of the cake.	