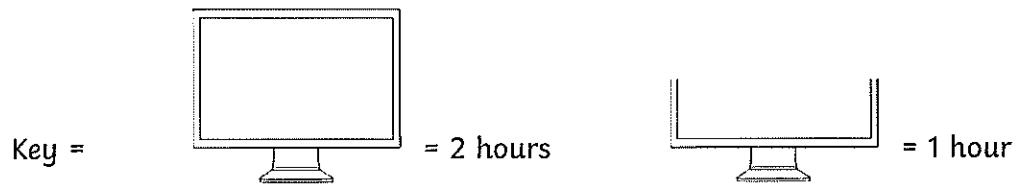




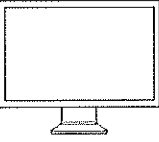
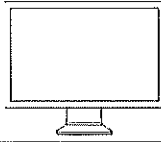
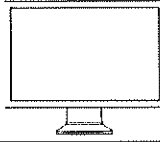



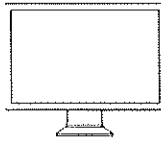


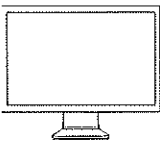

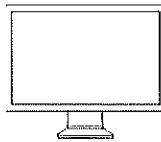
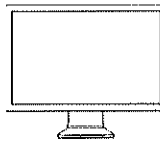

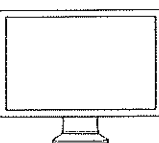
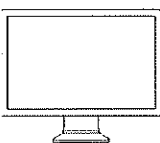
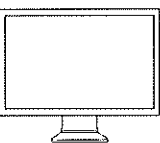
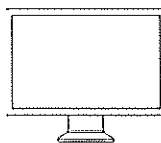
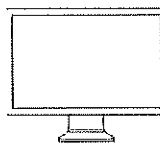
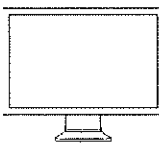



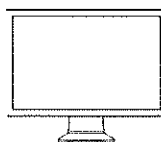

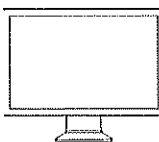


# Reading Pictograms

The following pictogram shows the number of hours spent playing computer games by 6 children in one week. Can you answer the questions below?



					
					
					
					
					
					
					
					
<b>Dave</b>	<b>Laura</b>	<b>Delia</b>	<b>Caleb</b>	<b>Jenni</b>	<b>Ali</b>

# Reading Pictograms

1. Who played computer games for the longest amount of time?

---

2. What is the difference in hours between the person who played the least and the person who played the most?

---

3. Who played for more hours? Boys or girls?

---

4. How many children spent less than 8 hours playing games?

---

5. What was the total number of hours played on computer games?

---